

Name \_\_\_\_\_

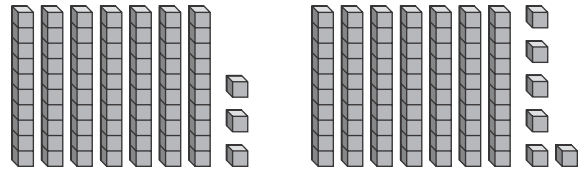
1. Nick's locker number is 62. Mai's locker number is less than Nick's locker number.

Which is Mai's locker number? How do you know?



- (A) 61; because  $61 < 62$       (C) 63; because  $63 > 62$   
 (B) 62; because  $62 > 60$       (D) 64; because  $64 > 60$

2. Choose two ways to compare the place-value blocks. Explain.



- $76 > 73$ ; 73 has fewer ones than 76.  
  $73 < 76$ ; 73 has fewer ones than 76.  
  $73 > 76$ ; 73 has more ones than 76.  
  $73 = 76$ ; 73 and 76 have the same number of tens.  
  $76 < 73$ ; 76 has more ones than 73.

3. Find 10 more than 82 without having to count. Explain how you know.

- (A) 28; 28 has one more ten than 82.  
 (B) 72; 72 has one less ten than 82.  
 (C) 83; 83 has one more one than 82.  
 (D) 92; 92 has one more ten than 82.

4. Use the clues to find the secret number from the choices on the right.



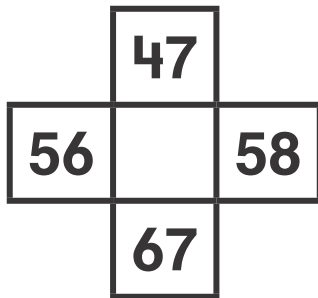
I am greater than 61.

What numbers could I be?



I also have a 3 in the ones place. What number am I? \_\_\_\_\_

5. Write the number to complete the part of the hundred chart. Explain how you know.



\_\_\_\_\_

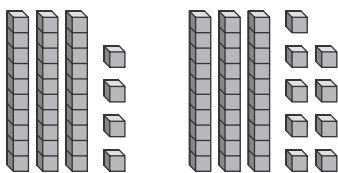
\_\_\_\_\_

6. What number is 10 less than 55. What number is 10 more than 55?

10 less than 55 is \_\_\_\_\_.

10 more than 55 is \_\_\_\_\_.

7. Look at the place-value blocks. Write the numbers to make the sentences true. Explain how you know which number is greater.



\_\_\_\_\_ is greater than \_\_\_\_\_.

\_\_\_\_\_ is less than \_\_\_\_\_.