

1. Luis eats lunch after 10 o'clock and before 2 o'clock every day. Choose two clocks that show the time Luis might eat lunch.













2. Which clock shows the same time as the clock face?



(A)



(B)



(C)



(D)



3. What is the value of 8 dimes?

4. What is the value of 6 dimes and 7 pennies?


- (A) 60¢      (B) 67¢      (C) 76¢      (D) 13¢
- 

5. How many pennies are in one dollar?

\_\_\_\_\_ pennies

---


6. Draw hands on the clock face to show the time that the movie starts.



A Trip to the Zoo	
Time	Activity
9:30	Leave School
10:00	Zoo Tour
11:30	Lunch
12:30	Movie
2:00	Leave Zoo

---

7. Do both clocks show the same time? How do you know you are correct?



---

---

---

---