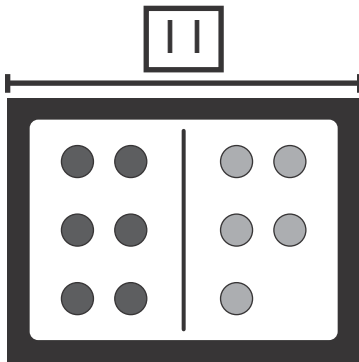


1. Dan has 7 baseballs.
Leah has 5 baseballs.
Which equation shows how many more baseballs Dan has than Leah?

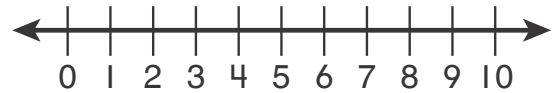


- (A) $5 + 3 = ?$
 (B) $7 - 5 = ?$
 (C) $5 - 3 = ?$
 (D) $7 + 2 = ?$
2. Which related addition fact can be used to find $11 - 6$?



- (A) $5 + 6 = 11$
 (B) $10 + 1 = 11$
 (C) $5 + 1 = 6$
 (D) $6 + 6 = 12$

3. Find $4 + 3$.
Use the number line to count on.



- (A) 5
 (B) 6
 (C) 7
 (D) 8
4. Trina has 7 more bracelets than Sara.
Sara has 8 bracelets.
How many bracelets does Trina have?

Which equation can help you solve the problem?

- (A) $8 - 7 = ?$
 (B) $? + 7 = 8$
 (C) $8 + ? = 16$
 (D) $8 + 7 = ?$

5. Rick counts beads by 1s. He counts to 110. Which number will Rick say next?

- (A) 112
- (B) 111
- (C) 109
- (D) 101

6. Lakisha has 5 red marbles, 9 blue marbles, and 3 yellow marbles. How many marbles does Lakisha have in all?

$5 + 9 + 3 = \underline{\quad ? \quad}$


- (A) 8
- (B) 12
- (C) 14
- (D) 17

7. Look at the picture graph. How many fewer cats than dogs are there?



- (A) 1
- (B) 2
- (C) 3
- (D) 5

8. 31 is ? groups of 10 and 1 left over.



- (A) 2
- (B) 3
- (C) 10
- (D) 30

9. Which number makes the equation true?




$$17 = \underline{\quad ? \quad} + 9$$

- (A) 25
- (B) 9
- (C) 8
- (D) 7

10. Which is a true equation?

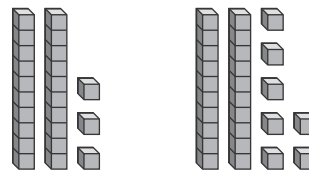
- (A) $4 + 7 = 6 + 6$
- (B) $14 - 6 = 9 + 1$
- (C) $6 + 6 = 7 + 5$
- (D) $16 - 9 = 5 + 3$

11. Ray asked his friends about their favorite snack. He made this tally chart to show the results. How many friends took Ray's survey?

Favorite Snack	
 Apple	
 Yogurt	
 Pretzel	

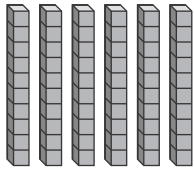
- (A) 7
- (B) 12
- (C) 15
- (D) 16

12. Which correctly compares the two sets of place-value blocks?



- (A) $23 > 27$
- (B) $23 < 27$
- (C) $23 = 27$
- (D) $27 < 23$

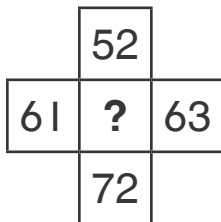
13. Use the place-value blocks.
Find the difference.



$$60 - 40 = \underline{\quad}$$

- (A) 2
- (B) 20
- (C) 30
- (D) 40

14. Which number completes the part of the hundred chart?



- (A) 53
- (B) 60
- (C) 62
- (D) 71

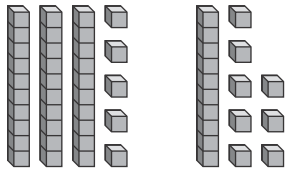
15. Which is a way to show sixteen?

- (A) 1 ten and 6 ones
- (B) 1 ten and 16 ones
- (C) 6 tens and 1 one
- (D) 16 tens

16. Celia has 46 buttons.
Her brother gives her
10 more buttons.
How many buttons does
Celia have now?

- (A) 36
- (B) 47
- (C) 50
- (D) 56

17. Which equation matches the place-value blocks below?



- (A) $35 + 10 = 45$
- (B) $35 + 15 = 50$
- (C) $35 + 18 = 53$
- (D) $35 + 19 = 54$

18. The equation $8 + 7 = 15$ is true.

Which one of these equations is also true?

- (A) $7 + 8 = 14$
- (B) $7 + 8 = 15$
- (C) $7 + 8 = 16$
- (D) $7 + 8 = 17$

19. Which word describes Line K?

Line J _____

Line K _____

Line L _____

- (A) longest
- (B) bottom
- (C) tallest
- (D) shortest

20. Which could be used to find the length of the spoon?



- (A) cup
- (B) balance
- (C) clock
- (D) paper clips

21. What time is shown on the clock?

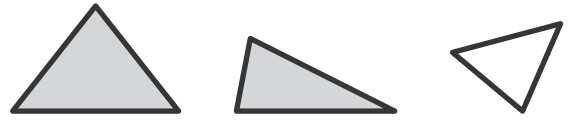


- (A) 12:30
- (B) 1:30
- (C) 6:00
- (D) 6:30

22. Which shape shows halves?

- (A)
- (B)
- (C)
- (D)

23. All of these shapes are triangles. Which is true of all triangles?



- (A) They have 4 sides.
- (B) They have 3 vertices.
- (C) They are gray.
- (D) They are **NOT** closed.

24. How many does Ivan need to make a ?

- (A) 2
- (B) 3
- (C) 4
- (D) 6