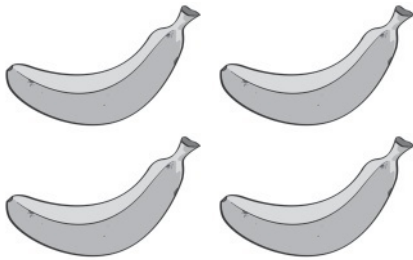



1. How many bananas are there?



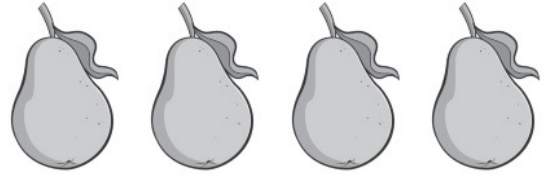
- (A) 2
- (B) 3
- (C) 4**
- (D) 5

2. How many birds are there?



- (A) 7**
- (B) 8
- (C) 9
- (D) 10

3. Which group of apples is greater in number than the group of pears?



4. Which number is less than the number on the card?




- (A) 9
- (B) 8
- (C) 6
- (D) 4**

5. Which sentence tells about adding the groups of baseballs?



- (A) 2 and 4 is 6.
- (B) 2 and 5 is 7.
- (C) 2 and 6 is 8.
- (D) 2 and 7 is 9.

6. Which number tells how many are left?



- (A) 3
- (B) 4
- (C) 5
- (D) 6

7. Tom puts 3 eggs on a table. Then he puts 3 more eggs on the table. Which tells how many eggs he puts on the table in all?



- (A) 3 in all
- (B) 4 in all
- (C) 5 in all
- (D) 6 in all

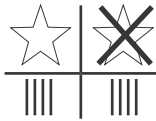
8. Which equation matches the picture?



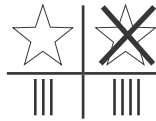
- (A) $8 = 1 + 7$
- (B) $8 = 2 + 6$
- (C) $8 = 4 + 4$
- (D) $9 = 2 + 7$

Name _____

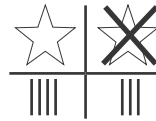
9. Which chart shows how many stars are white and how many stars are NOT white?



(A)



(B)

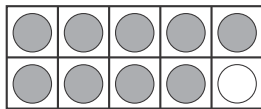


(C)

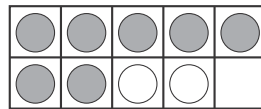


(D)

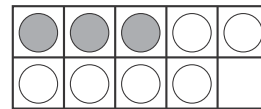
10. Which shows $9 + 1$?



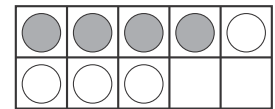
(A)



(B)



(C)



(D)

11. Which equation matches the picture?



(A) $8 - 3 = 5$

(B) $7 - 2 = 5$

(C) $6 - 2 = 4$

(D) $5 - 3 = 2$

12. Which number is greater than the number on the card?



(A) 5

(B) 6

(C) 7

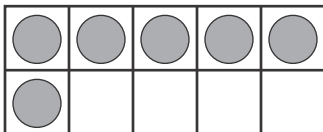
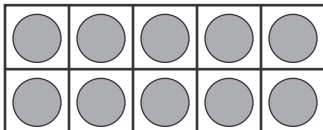
(D) 8

13. Which number tells how many?




- (A) 14
- (B) 15**
- (C) 16
- (D) 17

14. Which equation matches the counters in the double ten-frame?



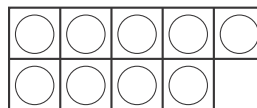
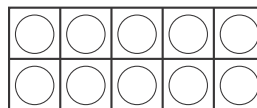
- (A) $18 = 10 + 8$
- (B) $17 = 10 + 7$
- (C) $16 = 10 + 6$**
- (D) $15 = 10 + 5$

15. Which number tells how many cubes?



- (A) 40
- (B) 50
- (C) 60**
- (D) 70



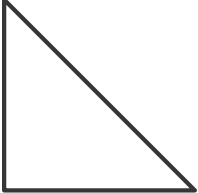

16. Which numbers complete the equation and match the counters in the double ten-frame?







_____ + _____ = 19

- (A) 10 and 6
- (B) 10 and 7
- (C) 10 and 8
- (D) 10 and 9**





17. Which shape is NOT a square?

- (A) 
- (B) 
- (C) 
- (D) 

18. Which object is longer than the other objects?

- (A) 
- (B) 
- (C) 
- (D) 

19. Which shows 12?

- (A) 
- (B) 
- (C) 
- (D) 

20. Count the ants by tens and then by ones. Which number tells how many?



- (A) 44
- (B) 45
- (C) 46
- (D) 47

Name _____

21. Which shape can be built using the solid figures at the right?




(A)



(B)



(C)




(D)

22. Which object is NOT solid?



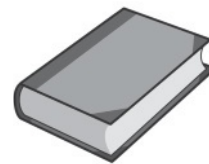
(A)



(B)



(C)



(D)

23. Which solid figure does NOT have a flat surface?

(A)



(B)



(C)



(D)



24. Which tool can measure how much the container holds?



(A)



(B)



(C)



(D)

